

Họ và tên :

BÀI TẬP THEO TUẦN

Lớp: 1

TUẦN 14

Bài 1: Tính:

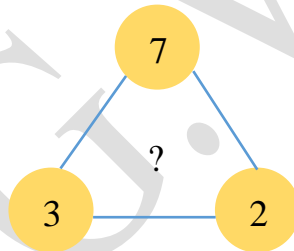
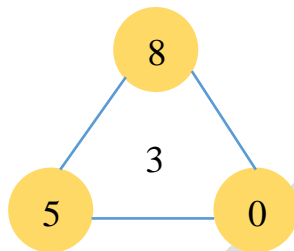
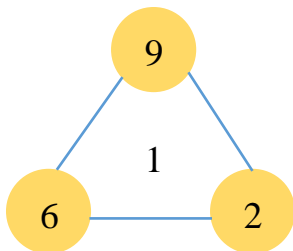
$$\begin{array}{r} 8 \\ - 2 \\ \hline \dots \end{array}$$

$$\begin{array}{r} 7 \\ - 3 \\ \hline \dots \end{array}$$

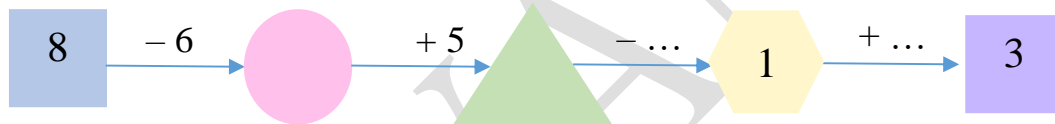
$$\begin{array}{r} 7 \\ - 5 \\ \hline \dots \end{array}$$

$$\begin{array}{r} 9 \\ - 3 \\ \hline \dots \end{array}$$

Bài 2. Số?




Bài 3. Điền số thích hợp vào ô trống:



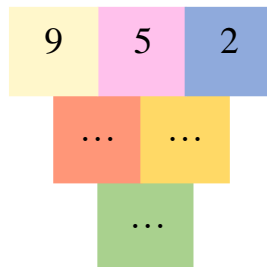
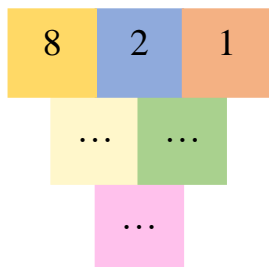
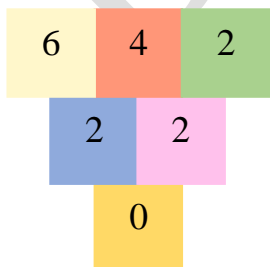
Bài 4. Nói (theo mẫu):

a. $9 - \square < 9$

b. $10 - \square > 8$



Bài 5: Số?



GỢI Ý/HƯỚNG DẪN GIẢI

Bài 1: Tính:

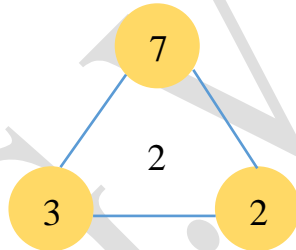
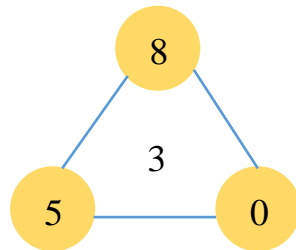
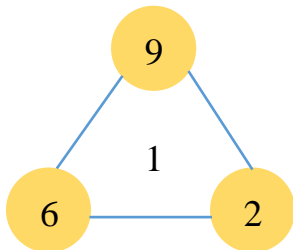
$$\begin{array}{r} 8 \\ - 2 \\ \hline 6 \end{array}$$

$$\begin{array}{r} 7 \\ - 3 \\ \hline 4 \end{array}$$

$$\begin{array}{r} 7 \\ - 5 \\ \hline 3 \end{array}$$

$$\begin{array}{r} 9 \\ - 3 \\ \hline 6 \end{array}$$

Bài 2. Số?

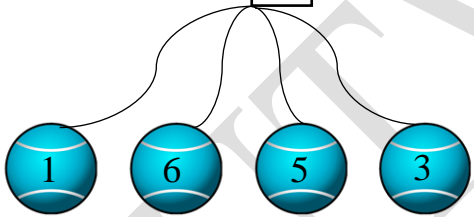


Bài 3. Điền số thích hợp vào ô trống:

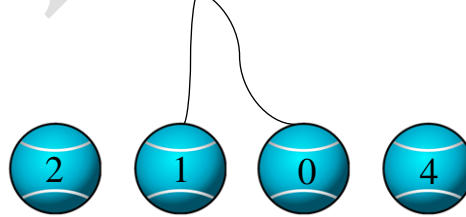


Bài 4. Nói (theo mẫu):

a. $9 - \square < 9$



b. $10 - \square > 8$



Bài 5: Số?

