

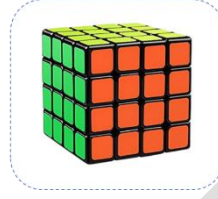
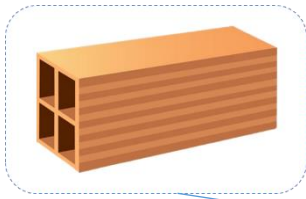
Họ và tên :

BÀI TẬP THEO TUẦN

Lớp: 1

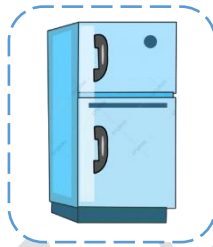
TUẦN 10

Bài 1: Nối (theo mẫu):



Khối lập phương

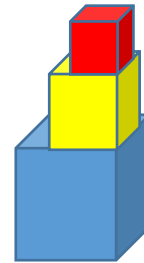
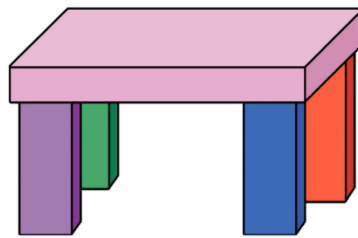
Khối hộp chữ nhật




Bài 2: Số?

Có ... khối lập phương


Có ... khối hộp chữ nhật



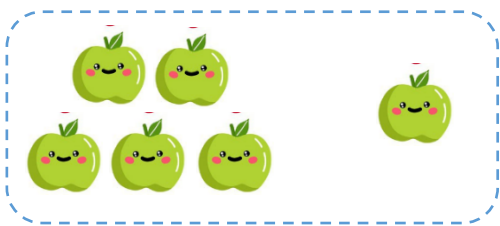
Bài 3. Số?




$$3 - 1 = \square$$



$$2 - 1 = \square$$




$$5 - 1 = \square$$




$$4 - 2 = \square$$


Bài 4. Nối hình vẽ với phép cộng thích hợp:



$$5 - 2$$




$$4 - 2$$




$$3 - 2$$

Bài 5. Viết phép tính thích hợp vào ô trống:



$$\square - \square = \square$$

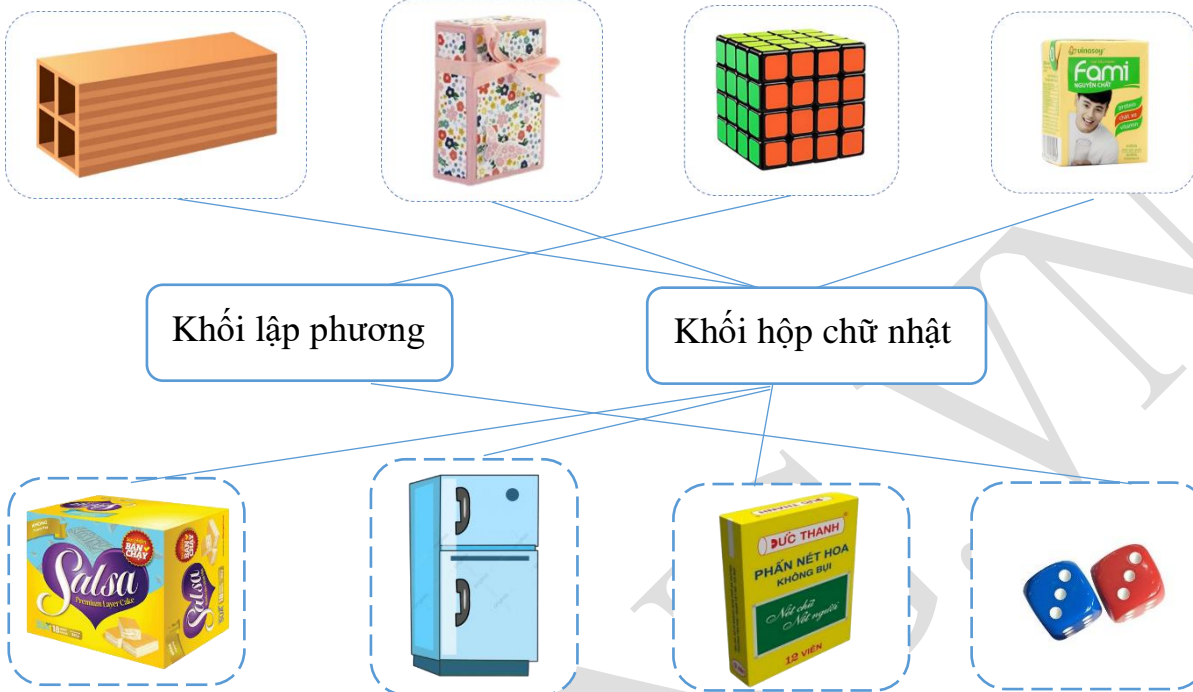


$$\square - \square = \square$$

CHÚC CON HOÀN THÀNH TỐT BÀI LÀM CỦA MÌNH

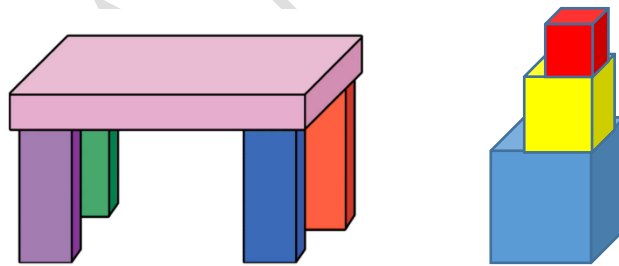
GỢI Ý/HƯỚNG DẪN GIẢI

Bài 1: Nói (theo mẫu):




Bài 2: Số?


Có 3 khối lập phương
Có 5 khối hộp chữ nhật



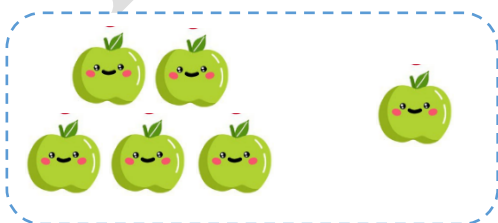
Bài 3: Số?




$$3 - 1 = 2$$



$$2 - 1 = 1$$






$$5 - 1 = 4$$



$$4 - 2 = 2$$

Bài 4. Nối hình vẽ với phép cộng thích hợp:




5 - 2

4 - 2

3 - 2

Bài 5. Viết phép tính thích hợp vào ô trống:



4 - 2 = 2

3 - 1 = 2