






Họ và tên :

BÀI TẬP THEO TUẦN

Lớp: 1

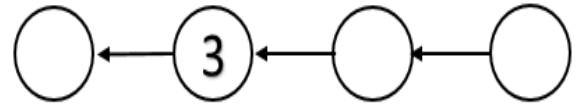
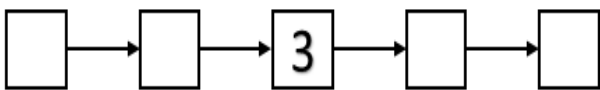
TUẦN 3

Bài 1: Viết (theo mẫu):



3 > 1 1 < 3

Bài 2: Số?



2

5

3 1

Bài 3: Nói với số thích hợp:

1 <

3 <

1

2

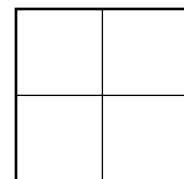
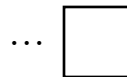
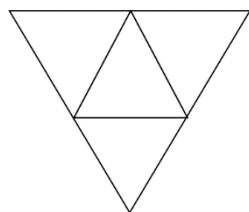
4

5

5 >


4 >

Bài 4: Hình vẽ dưới đây có:




GỢI Ý/HƯỚNG DẪN GIẢI


Bài 1: Viết (theo mẫu):



$3 > 1$ $1 < 3$

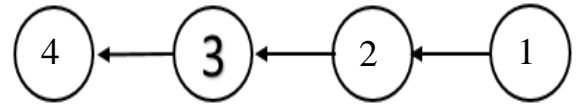
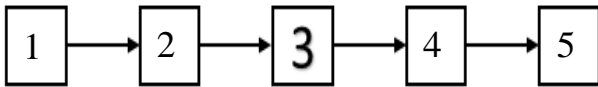


$4 > 2$ $2 < 4$



$5 > 3$ $3 < 5$

Bài 2: Số?



Bài 3: Nối với số thích hợp:

$1 < \square$

$3 < \square$



$5 > \square$

$4 > \square$

Bài 4: Hình vẽ dưới đây có:

